




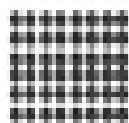

Name \_\_\_\_\_ Date \_\_\_\_\_

Multiplication/Division Arrays Set 1

Write two multiplication facts and two division facts to describe each array.



_____	_____	_____	_____	_____	_____
_____	_____	_____	_____	_____	_____
_____	_____	_____	_____	_____	_____



_____	_____	_____	_____	_____	_____
_____	_____	_____	_____	_____	_____
_____	_____	_____	_____	_____	_____