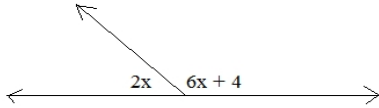


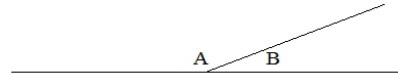
Angles Properties Quiz

1) Find  $x$ :

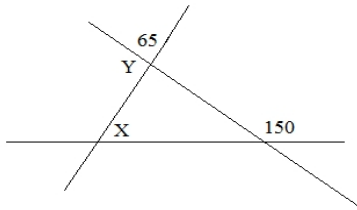


2) The ratio of  $A$  to  $B$  is  $7:2$

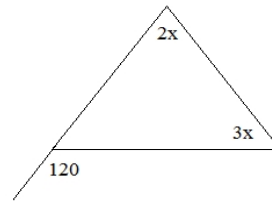
What is the measure of angle  $B$ ?



3) Determine  $X$  and  $Y$



4) What is the measure of the smallest angle?



5) Given:  $l$  and  $m$  are parallel.  
Find the angles:

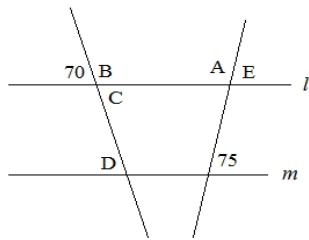
A:

B:

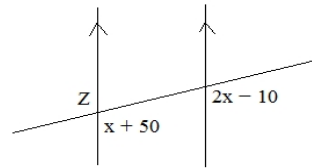
C:

D:

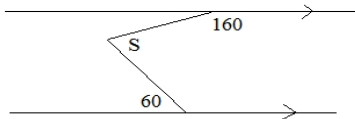
E:



6) What is the measure of angle  $Z$ ?



7) Find  $S$ :



8) Find  $x$ :

