


# Symmetry



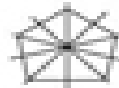
How many lines of symmetry does each figure have?



1



2



5



0

Is the dashed line a line symmetry? Write yes or no.



\_\_\_\_\_



\_\_\_\_\_



\_\_\_\_\_



\_\_\_\_\_

Draw the lines of symmetry. Write how many there are.



\_\_\_\_\_



\_\_\_\_\_




\_\_\_\_\_

Draw the lines of symmetry. Write how many there are.



\_\_\_\_\_



\_\_\_\_\_



\_\_\_\_\_

Draw the lines of symmetry. Write how many there are.



\_\_\_\_\_



\_\_\_\_\_



\_\_\_\_\_