

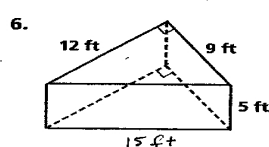
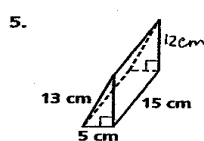
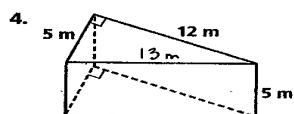
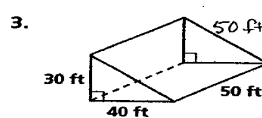
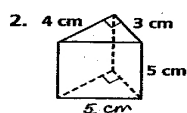
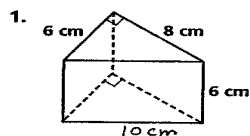
Name _____ Class _____ Date _____

Practice 6-2

Example Exercises

Example 1

Find (a) the lateral area and (b) the surface area of each prism.



Example 2

Find the lateral area of each cylinder to the nearest tenth.

