

Name : _____

Score : _____

Teacher : _____

Date : _____

Identify the Type For Each Regular Polygon.



Type: _____



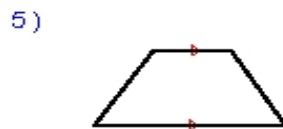
Type: _____



Type: _____



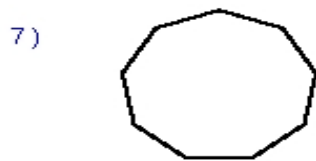
Type: _____



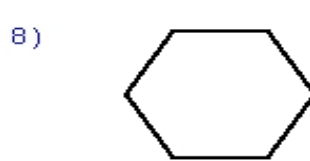
Type: _____



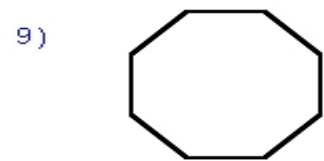
Type: _____



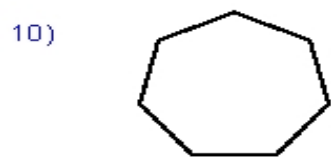
Type: _____



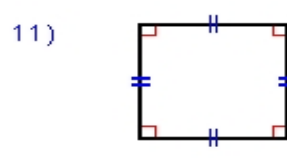
Type: _____



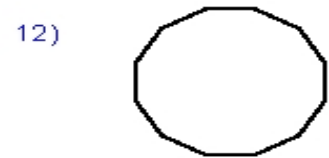
Type: _____



Type: _____



Type: _____



Type: _____