

Name _____

Fact Families

Page No. 12

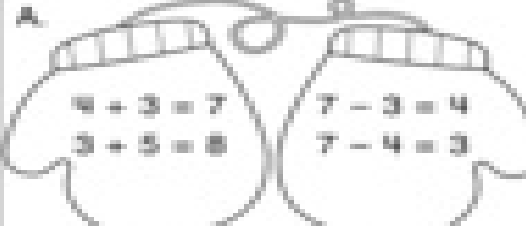

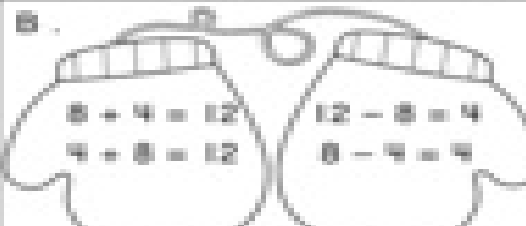
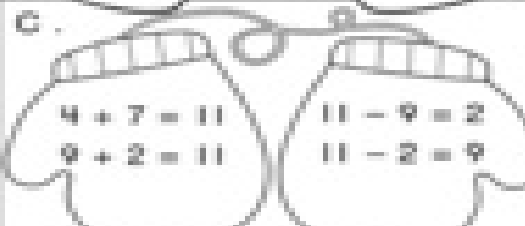
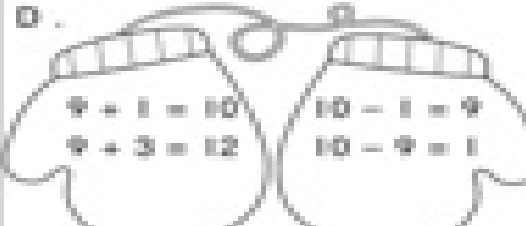
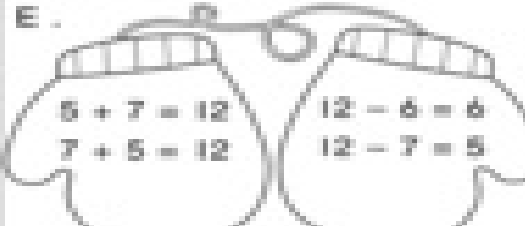
Mittens for Mouse



Cross out the fact that does not belong.



Write the missing fact.

<p>A.</p>  <p> $4 + 3 = 7$ $7 - 3 = 4$ $3 + 5 = 8$ $7 - 4 = 3$ </p> <p>_____ ○ _____ = _____</p>	
<p>B.</p>  <p> $8 + 4 = 12$ $12 - 8 = 4$ $4 + 8 = 12$ $8 - 4 = 4$ </p> <p>_____ ○ _____ = _____</p>	<p>C.</p>  <p> $4 + 7 = 11$ $11 - 9 = 2$ $9 + 2 = 11$ $11 - 2 = 9$ </p> <p>_____ ○ _____ = _____</p>
<p>D.</p>  <p> $9 + 1 = 10$ $10 - 1 = 9$ $9 + 3 = 12$ $10 - 9 = 1$ </p> <p>_____ ○ _____ = _____</p>	<p>E.</p>  <p> $5 + 7 = 12$ $12 - 6 = 6$ $7 + 5 = 12$ $12 - 7 = 5$ </p> <p>_____ ○ _____ = _____</p>