

Name _____











Date _____

Comparing Fractions

Inside the Warehouse

Color each shape to show the fraction.

Write < or > in each .

 <p>A. <input type="radio"/> $\frac{1}{4} <$ <input type="radio"/> $\frac{1}{10}$</p>	 <p>B. <input type="radio"/> $\frac{3}{10} <$ <input type="radio"/> $\frac{3}{10}$</p>
 <p>C. <input type="radio"/> $\frac{2}{10} <$ <input type="radio"/> $\frac{2}{12}$</p>	 <p>D. <input type="radio"/> $\frac{1}{3} <$ <input type="radio"/> $\frac{1}{4}$</p>
 <p>E. <input type="radio"/> $\frac{2}{4} <$ <input type="radio"/> $\frac{1}{6}$</p>	 <p>F. <input type="radio"/> $\frac{3}{10} <$ <input type="radio"/> $\frac{3}{10}$</p>
 <p>G. <input type="radio"/> $\frac{1}{10} <$ <input type="radio"/> $\frac{1}{10}$</p>	 <p>H. <input type="radio"/> $\frac{3}{12} <$ <input type="radio"/> $\frac{3}{10}$</p>
 <p>I. <input type="radio"/> $\frac{3}{10} <$ <input type="radio"/> $\frac{3}{10}$</p>	 <p>J. <input type="radio"/> $\frac{3}{10} <$ <input type="radio"/> $\frac{3}{10}$</p>



Remember to color each box to tell that $\frac{3}{10}$ is less than $\frac{3}{10}$.