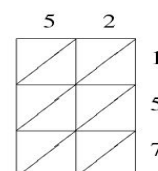
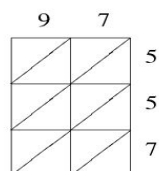
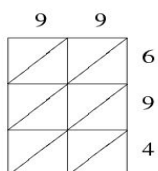
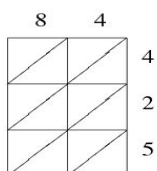
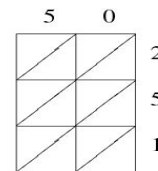
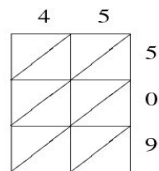
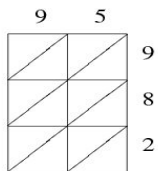
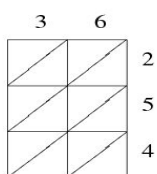


## Lattice Multiplication (A)

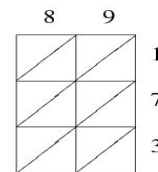
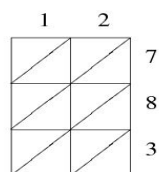
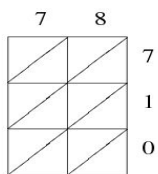
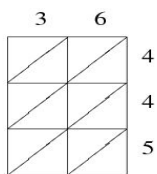
Use lattice multiplication to find each product.



$$\underline{\quad} \times \underline{\quad} = \underline{\quad} \times \underline{\quad} = \underline{\quad} \times \underline{\quad} = 52 \times 157 = \underline{\quad}$$



$$36 \times 254 = \underline{\quad} \quad 95 \times 982 = \underline{\quad} \quad 45 \times 509 = \underline{\quad} \quad 50 \times 251 = \underline{\quad}$$



$$\underline{\quad} \times \underline{\quad} = \underline{\quad} \times \underline{\quad} = 12 \times 783 = \underline{\quad} \quad 89 \times 173 = \underline{\quad}$$