

Name : \_\_\_\_\_

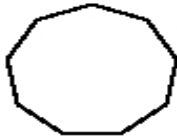
Score : \_\_\_\_\_

Teacher : \_\_\_\_\_

Date : \_\_\_\_\_

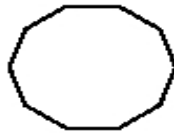
**Find the measure of one interior angle, one exterior angle, and the interior angle sum for each polygon. Round your answer to the nearest tenth if necessary.**

1)



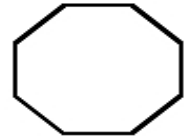
Interior Angle: \_\_\_\_\_  
Exterior Angle: \_\_\_\_\_  
Interior Angle Sum: \_\_\_\_\_

2)



Interior Angle: \_\_\_\_\_  
Exterior Angle: \_\_\_\_\_  
Interior Angle Sum: \_\_\_\_\_

3)



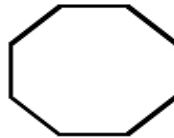
Interior Angle: \_\_\_\_\_  
Exterior Angle: \_\_\_\_\_  
Interior Angle Sum: \_\_\_\_\_

4)



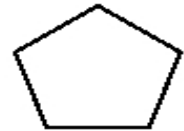
Interior Angle: \_\_\_\_\_  
Exterior Angle: \_\_\_\_\_  
Interior Angle Sum: \_\_\_\_\_

5)



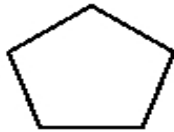
Interior Angle: \_\_\_\_\_  
Exterior Angle: \_\_\_\_\_  
Interior Angle Sum: \_\_\_\_\_

6)



Interior Angle: \_\_\_\_\_  
Exterior Angle: \_\_\_\_\_  
Interior Angle Sum: \_\_\_\_\_

7)



Interior Angle: \_\_\_\_\_  
Exterior Angle: \_\_\_\_\_  
Interior Angle Sum: \_\_\_\_\_

8)



Interior Angle: \_\_\_\_\_  
Exterior Angle: \_\_\_\_\_  
Interior Angle Sum: \_\_\_\_\_

9)



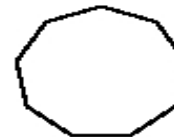
Interior Angle: \_\_\_\_\_  
Exterior Angle: \_\_\_\_\_  
Interior Angle Sum: \_\_\_\_\_

10)



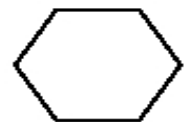
Interior Angle: \_\_\_\_\_  
Exterior Angle: \_\_\_\_\_  
Interior Angle Sum: \_\_\_\_\_

11)



Interior Angle: \_\_\_\_\_  
Exterior Angle: \_\_\_\_\_  
Interior Angle Sum: \_\_\_\_\_

12)



Interior Angle: \_\_\_\_\_  
Exterior Angle: \_\_\_\_\_  
Interior Angle Sum: \_\_\_\_\_