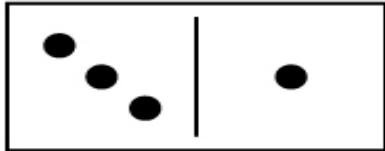


Name: _____

Domino Addition Up to 5

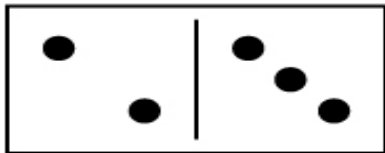
INSTRUCTIONS: Count and write how many dots are on each half of the domino. Next, add the numbers together to discover the total number of dots on each domino.



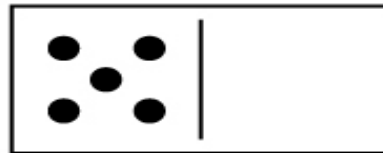
$$\underline{\quad} + \underline{\quad} = \boxed{\quad}$$



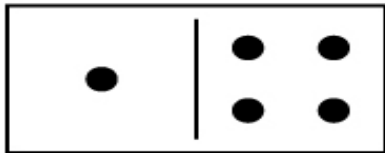
$$\underline{\quad} + \underline{\quad} = \boxed{\quad}$$



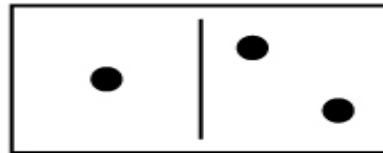
$$\underline{\quad} + \underline{\quad} = \boxed{\quad}$$



$$\underline{\quad} + \underline{\quad} = \boxed{\quad}$$



$$\underline{\quad} + \underline{\quad} = \boxed{\quad}$$



$$\underline{\quad} + \underline{\quad} = \boxed{\quad}$$

