


Using clocks



Write the time.



8 o'clock



half past 10



1 o'clock




half past 4




half past 3



12 o'clock




2 o'clock




10 o'clock


Draw the hands.




half past 7



1 o'clock




half past 9



half past 6




half past 1



11 o'clock



half past 8



7 o'clock