



Problem Solving




Circle the key **NUMBERS**


⁸
3
179



Underline the question?



Box any math **ACTION** words



Evaluate (what steps do I take?)



SOLVE and Check 

- Does my answer make sense?
- How can I double check?