

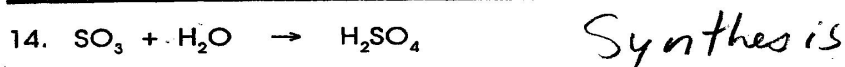
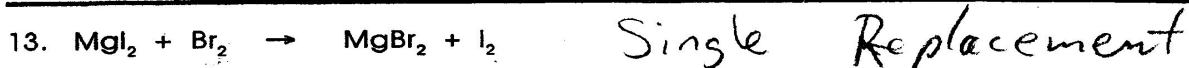
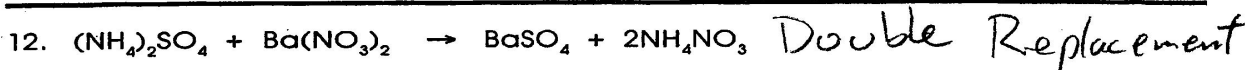
CLASSIFYING CHEMICAL REACTIONS



Part II

Classify the following reactions as synthesis, decomposition, single replacement or double replacement.

ANSWERS



~ ~ ~ ~ ~