



Name: _____ Subject: Year 6 Numeracy
 Date: _____ Unit: Area

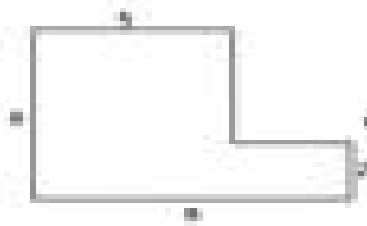
Find the area for the following shapes:




area = _____ cm²



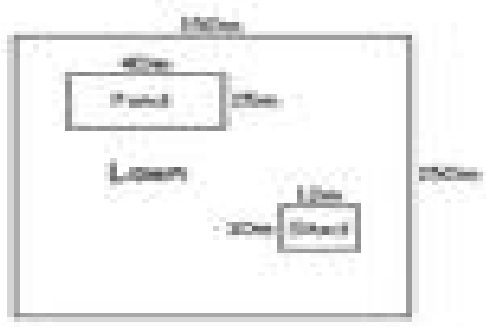
area = _____ cm²



area = _____ cm²



area = _____ cm²



area of pond = _____ m²
 area of shed = _____ m²
 area of lawn = _____ m²