

Name: _____

Volume

Volume Formulas: cube = s^3




rectangular prism = lwh



cylinder = $\pi r^2 h$




rectangular pyramid = $\frac{1}{2} lwh$

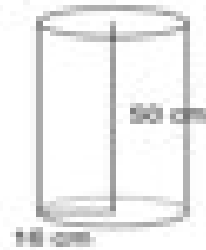


Directions: Find the volume of each shape.


1.



3.



2.



4.

