

Name : _____

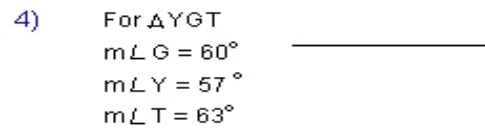
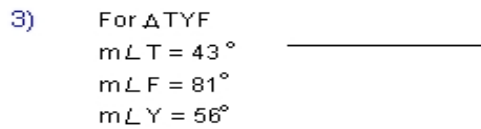
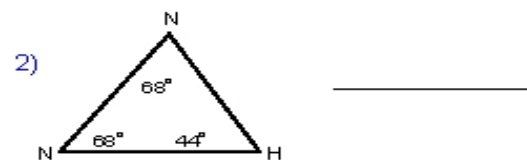
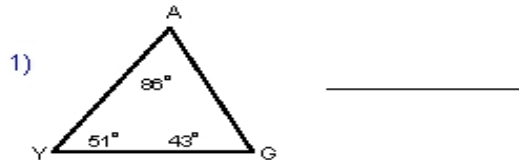
Score : _____

Teacher : _____

Date : _____

Triangle Inequality of Sides

Order each triangle's sides from largest to smallest.



Name the largest and smallest side for each triangle.

