


Name: _____

Analog Time


Draw the analog clock hands to match each digital time.

1




3:15

2




6:45

3




10:15

4




12:45

5




1:15

6




10:45

7



3:45

8



7:15