


Name _____ (Time)

Time to the hour and half-hour


Time to Measure

Write the time shown on each clock.

For each time you write, color the measuring cup with the matching time.



A. _____




B. _____




C. _____



D. _____




E. _____



F. _____



G. _____



H. _____




I. _____



J. _____




K. _____



L. _____



M. _____



N. _____

