

Name _____


Done Together

© 2017 A

Use the number line below to round the numbers according to the place value that are identified.

(7) Round this number to the nearest TENS.

25.52




(8) Round this number to the nearest TENS.

60.18




(9) Round this number to the nearest TENS.

123.45



(10) Round this number to the nearest TENS.

38.27



(11) Round this number to the nearest TENS.

56.199



(12) Round this number to the nearest TENS.

0.542

