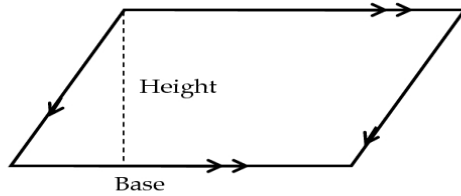
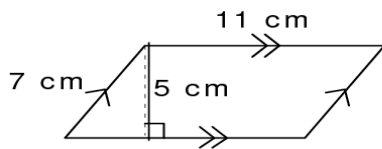


9.1 Areas of Parallelograms (and rectangles)

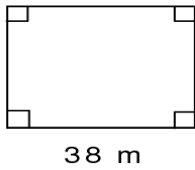
$$A_{\text{parallelogram}} = \text{base} \cdot \text{height} = bh$$



1. Area = _____



2. The figure is a rectangle with perimeter 126 m. Area = _____



3. The area of the parallelogram is 936 sq ft. $h =$ _____

