








Phases of the Moon

Name: _____

The moon's size changes throughout the month at regular intervals. This is called moon phases. Match the phase of the moon on the left with its correct description on the right.



- new moon
- waxing crescent
- first quarter
- waxing gibbous
- full moon
- waning gibbous
- last quarter
- waning crescent