


Day 1


Complete the table.

Add 34	
50	84
20	
0	
30	

Write the fraction that is represented by this rectangle.



How many sit-ups did Conner do on Monday, Tuesday, and Wednesday?



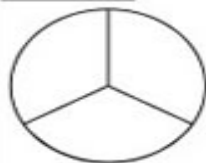
If 3 students read 4 books each, how many books did the students read in all?

Day 3

What time is shown on the clock?



How is the following circle divided?



A total of 219 students signed up to take swimming lessons. If 174 students are under 10 years old, how many students are over 10 years old?

$837 - 209 =$

Round each number to the nearest 100. Then, add.

$277 + 338$ is about _____

Write the missing numbers to complete the pattern.

3, 6, 9, _____
15, _____

What is the value of the number 7 in the following number?

987

What is the name of the quadrilateral that has 4 equal sides and 4 right angles?

Day 2

Day 4