



Name _____ Date _____


1. Look at the circuit below. What happens when the switch is closed? Draw a diagram to show what happens.



2. Now look at the circuit below. What happens when the switch is closed? Draw a diagram to show what happens.



3. What happens when the switch is closed? Draw a diagram to show what happens.



4. What happens when the switch is closed? Draw a diagram to show what happens.

