



Volumes of cubes

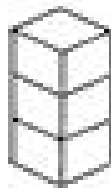
This cube is 1 cm long,
1 cm high, and 1 cm wide.
We say it has a volume of
1 cubic centimetre (1 cm³).




If we put 4 of these
cubes together the
new shape has a
volume of 4 cm³.



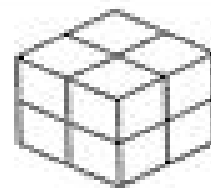
These shapes are made of 1 cm³ cubes. What are their volumes?




_____ cm³



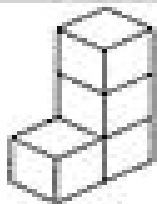
_____ cm³



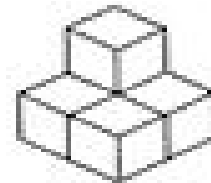
_____ cm³




_____ cm³



_____ cm³



_____ cm³



_____ cm³



_____ cm³



_____ cm³