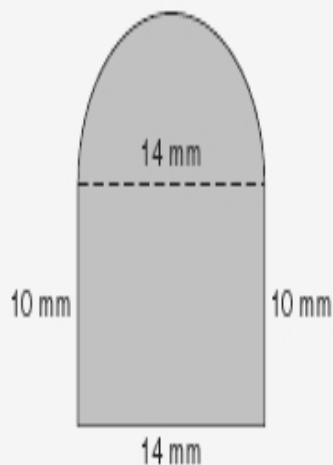


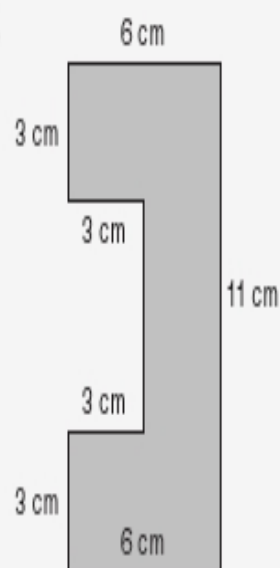
Practice

Find the area of each figure to the nearest tenth, if necessary.

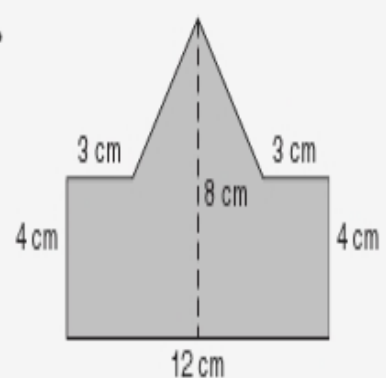
1.



2.



3.



4. **Standardized Test Practice** Which of the following has the same area as the figure shown?

A Square with  $s = 5$  in.

C Triangle with  $b = 6$  in. and  $h = 9$  in.

B Rectangle with  $\ell = 3$  in. and  $w = 2.5$  in.

D Parallelogram with  $b = 4$  in. and  $h = 7$  in.

