

Name _____


Date _____

Area of a Rectangle Version 1

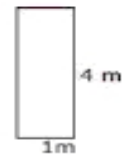
Find the area of all the rectangles. Remember that when it comes to rectangle area, length times width equal area.



1. Area = _____



2. Area = _____



3. Area = _____



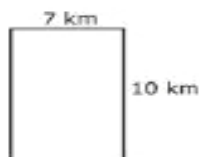
4. Area = _____



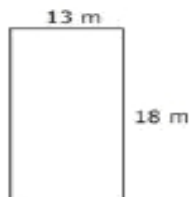
5. Area = _____



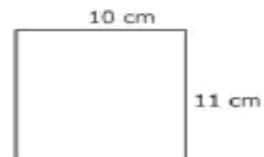
6. Area = _____



7. Area = _____



8. Area = _____



9. Area = _____