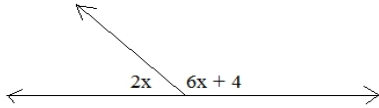


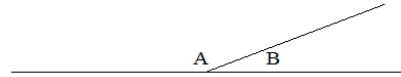
Angles Properties Quiz

1) Find  $x$ :

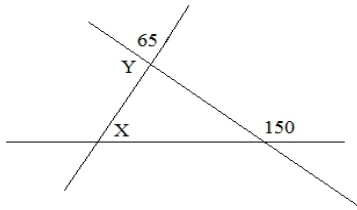


2) The ratio of A to B is 7:2

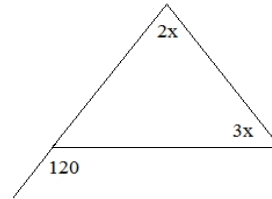
What is the measure of angle B?



3) Determine  $X$  and  $Y$

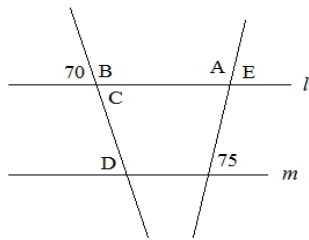


4) What is the measure of the smallest angle?

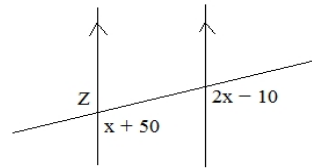


5) Given:  $l$  and  $m$  are parallel.  
Find the angles:

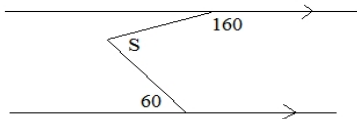
- A:
- B:
- C:
- D:
- E:



6) What is the measure of angle Z?



7) Find  $S$ :



8) Find  $x$ :

