










Name : _____ Score : _____




Teacher : _____ Date : _____




Visually Adding Simple Fractions

1)  +  = 
 $\frac{2}{9} + \frac{2}{9} =$ _____

2)  +  = 
 $\frac{1}{4} + \frac{1}{4} =$ _____

3)  +  = 
 $\frac{3}{10} + \frac{4}{10} =$ _____

4)  +  = 
 $\frac{1}{3} + \frac{1}{3} =$ _____

5)  +  = 
 $\frac{2}{12} + \frac{8}{12} =$ _____