







Name: \_\_\_\_\_

Monday

### Math Practice: Recognize and draw shapes (2.G.1)

Identify and describe the 3-D Shape.

|  |   |
|--|---|
| <br>Shape Name: _____   | Number of Faces: _____<br>Number of Vertices: _____<br>Number of Edges: _____ |
| <br>Shape Name: _____   | Number of Faces: _____<br>Number of Vertices: _____<br>Number of Edges: _____ |
| <br>Shape Name: _____   | Number of Faces: _____<br>Number of Vertices: _____<br>Number of Edges: _____ |
| <br>Shape Name: _____  | Number of Faces: _____<br>Number of Vertices: _____<br>Number of Edges: _____ |
| <br>Shape Name: _____ | Number of Faces: _____<br>Number of Vertices: _____<br>Number of Edges: _____ |
| <br>Shape Name: _____ | Number of Faces: _____<br>Number of Vertices: _____<br>Number of Edges: _____ |