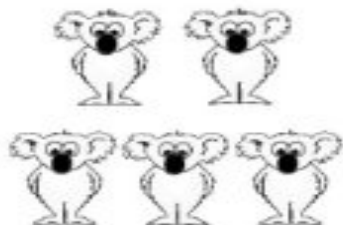



Zoo Addition





How many   altogether?

$$2 + 3 = \underline{5}$$


1.



How many   in all?

$$4 + 3 = \underline{\quad}$$


2.



How many   altogether?

$$4 + 4 = \underline{\quad}$$

3.



How many   altogether?

$$4 + 5 = \underline{\quad}$$

4.



How many   in all?

$$3 + 3 = \underline{\quad}$$