

Name _____

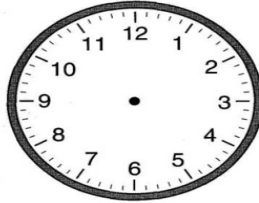
CCSS 2.MD.7 Tell and write time from analog and digital clocks to the nearest...

Telling Time

→ Directions: Draw in the minute and hour hands to match the digital time.



5:00



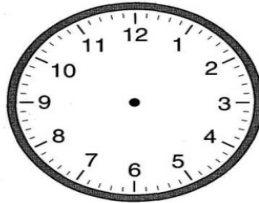
11:00



8:00



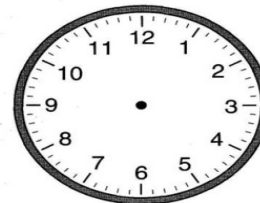
10:00



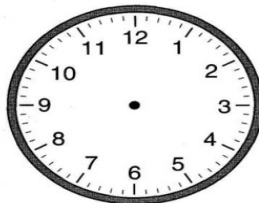
1:00



6:00



3:00



12:00



9:00

