



Directions: Draw teeth. Color in the missing teeth. Write a subtraction sentence to match your picture.



$5 - 3 = 2$



$2 - 0 = 2$



$2 - 0 = 2$



$2 - 0 = 2$




$2 - 0 = 2$



$2 - 0 = 2$



$2 - 0 = 2$



$2 - 0 = 2$