



## St. Patrick's Day Addition


sums to 100


Help Mr. Green find the answers to the addition problems by writing the sum in the shamrock below each problem.


$$\begin{array}{r} 29 \\ + 18 \\ \hline \end{array}$$



$$\begin{array}{r} 23 \\ + 17 \\ \hline \end{array}$$


$$\begin{array}{r} 58 \\ + 24 \\ \hline \end{array}$$



$$\begin{array}{r} 32 \\ + 28 \\ \hline \end{array}$$



$$\begin{array}{r} 43 \\ + 17 \\ \hline \end{array}$$



$$\begin{array}{r} 57 \\ + 29 \\ \hline \end{array}$$



$$\begin{array}{r} 44 \\ + 17 \\ \hline \end{array}$$


$$\begin{array}{r} 77 \\ + 15 \\ \hline \end{array}$$



$$\begin{array}{r} 54 \\ + 39 \\ \hline \end{array}$$



$$\begin{array}{r} 15 \\ + 56 \\ \hline \end{array}$$



$$\begin{array}{r} 24 \\ + 26 \\ \hline \end{array}$$



$$\begin{array}{r} 12 \\ + 88 \\ \hline \end{array}$$



$$\begin{array}{r} 17 \\ + 37 \\ \hline \end{array}$$



$$\begin{array}{r} 43 \\ + 29 \\ \hline \end{array}$$


$$\begin{array}{r} 23 \\ + 68 \\ \hline \end{array}$$


$$\begin{array}{r} 35 \\ + 19 \\ \hline \end{array}$$


$$\begin{array}{r} 15 \\ + 36 \\ \hline \end{array}$$


$$\begin{array}{r} 18 \\ + 29 \\ \hline \end{array}$$


$$\begin{array}{r} 37 \\ + 27 \\ \hline \end{array}$$


$$\begin{array}{r} 43 \\ + 18 \\ \hline \end{array}$$
