
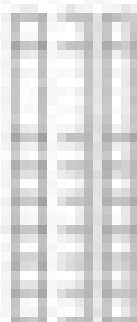


PLACE VALUE

Directions: Write how many tens and ones for each number.



23
 _____ tens
 _____ ones




47
 _____ tens
 _____ ones




52
 _____ tens
 _____ ones



34
 _____ tens
 _____ ones



68
 _____ tens
 _____ ones



75
 _____ tens
 _____ ones