



 Name: _____

CCSS Understand that the three digits of a three-digit number represent amounts of hundreds, tens, and ones...

Place Value Blocks

 Directions: Circle the place value blocks needed to make the number.

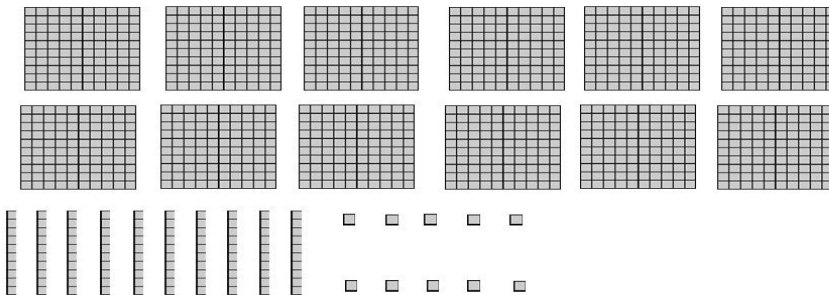
1. 347



How many hundred blocks did you circle? _____ Tens? _____ Ones? _____

Write the number shown by the blocks you circled. _____

2. 526



How many hundred blocks did you circle? _____ Tens? _____ Ones? _____

Write the number shown by the blocks you circled. _____

____ I double checked my work.