



Name \_\_\_\_\_





# Reindeer Ten Frames





Directions: Read the math problem on the reindeer sign. Color the boxes two different colors to show the problem. Write the number sentence with the sum on the line.


  $2 + 6 = \underline{\quad}$



$4 + 4 = \underline{\quad}$  


  $5 + 3 = \underline{\quad}$


$7 + 2 = \underline{\quad}$  


  $4 + 2 = \underline{\quad}$


$6 + 4 = \underline{\quad}$  


  $5 + 1 = \underline{\quad}$


$5 + 5 = \underline{\quad}$  