


Sorting the trees



Count how many apples are on each tree.



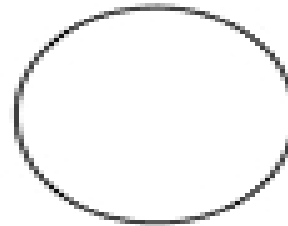
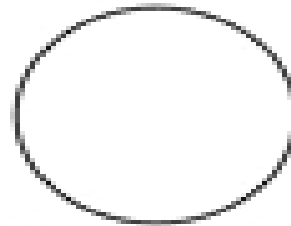
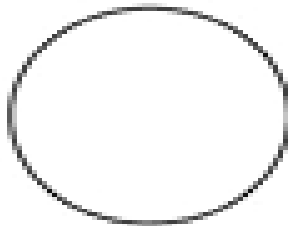
How many trees have...

3 apples?	
-----------	--

4 apples?	
-----------	--

5 apples?	
-----------	--

Draw 1 more tree for each set.



Now how many trees have...

3 apples?	
-----------	--

4 apples?	
-----------	--

5 apples?	
-----------	--