

# Using clocks






Write the time.



8 o'clock




half past 10




Draw the hands.




half past 7




1 o'clock



half past 9




half past 6




half past 1



11 o'clock



half past 8



2 o'clock