







Name _____ Date _____



Equivalent Fractions



For each problem, color the blank shape and write the equivalent fraction.



1  = 
 $\frac{1}{4} = \frac{2}{8}$



2  = 
 = $\frac{2}{5}$



3  = 
 $\frac{2}{6} = \frac{\quad}{3}$



4  = 
 = $\frac{1}{2}$



5  = 
 $\frac{6}{10} = \frac{\quad}{5}$

6  = 
 = $\frac{4}{10}$

7  = 
 $\frac{2}{4} = \frac{\quad}{\quad}$

8  = 
 = $\frac{4}{6}$

9  = 
 $\frac{1}{4} = \frac{\quad}{8}$

10  = 
 = $\frac{2}{6}$

© 2009 by Linda Ward Beech, Scholastic Teaching Resources