

**Identifying angles**

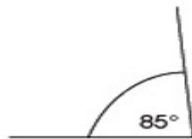
State which of the angles in the drawings are:

- right angles
- acute angles
- obtuse angles
- reflex angles

a.



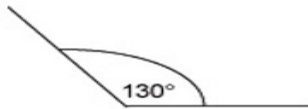
b.




c.



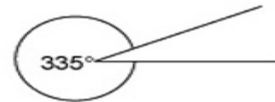
d.



e.



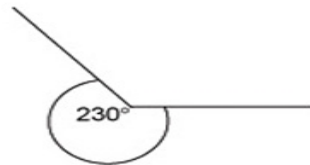
f.



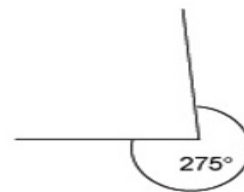
g.



h.



i.



Now check your answers with the answer sheet.