



Name: \_\_\_\_\_


Fill in the part-part-whole box and make an equation to match.




$$\underline{\quad} + \underline{\quad} = \underline{\quad}$$



$$\underline{\quad} + \underline{\quad} = \underline{\quad}$$



$$\underline{\quad} + \underline{\quad} = \underline{\quad}$$



$$\underline{\quad} + \underline{\quad} = \underline{\quad}$$

Copyright © 2009 by Pearson Education, Inc.