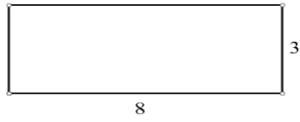


### Perimeter & Area Worksheet I

For each of the following plane figures, find the  
Assume all units are in cm.

1)



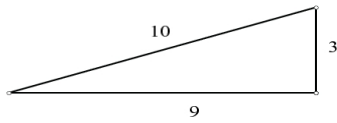
**Perimeter** &

**Area**

**Perimeter**

**Area**

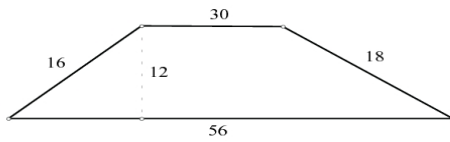
2)



**Perimeter**

**Area**

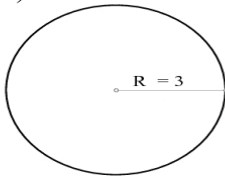
3)



**Perimeter**

**Area**

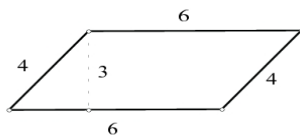
4)



**Circumference**

**Area**

5)



**Perimeter**

**Area**