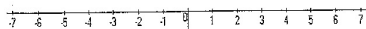


Student Name: \_\_\_\_\_

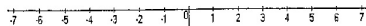
Score: \_\_\_\_\_

Graph Using Number Line

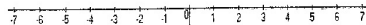
$$x > 4$$



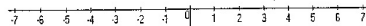
$$x < -2$$



$$x \geq 0$$



$$x > -3$$



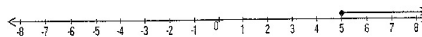
$$x \leq 2$$



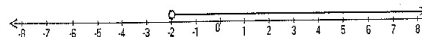
Student Name: \_\_\_\_\_

Score: \_\_\_\_\_

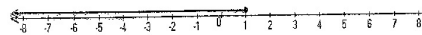
Write the Inequalities for Graphs



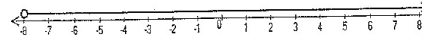
Inequality: \_\_\_\_\_



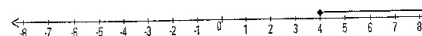
Inequality: \_\_\_\_\_



Inequality: \_\_\_\_\_



Inequality: \_\_\_\_\_



Inequality: \_\_\_\_\_