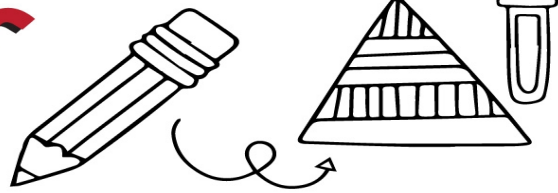


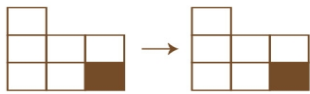
Name: _____

Date: _____

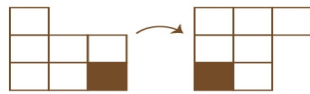
8th grade Transformations



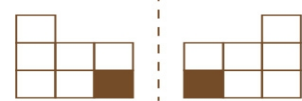
Identify how each shape has moved.



TRANSLATION



ROTATION-CLOCKWISE



REFLECTION

