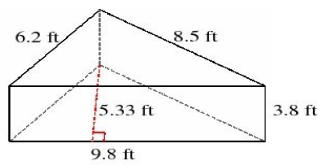


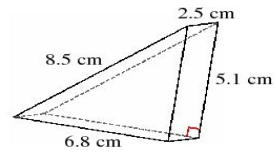
Volume and Surface Area of Triangular Prisms (A)

Instructions: Find the volume and surface area for each triangular prism.

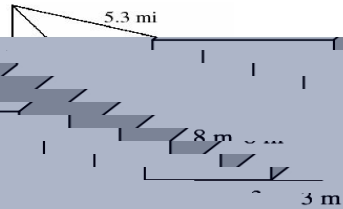
1)



2)



3)



4)

