

Name: \_\_\_\_\_


Date: \_\_\_\_\_

Mathematics - Chapter 11


Page: \_\_\_\_\_

Graph the image of the figure under the transformation given.


11. Rotate 180° about the origin.



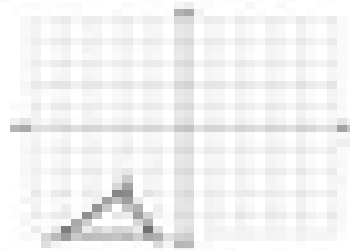
12. Rotate 90° counter-clockwise about the origin.




13. Rotate 90° clockwise about the origin.



14. Rotate 180° about the origin.



15. Rotate 90° clockwise about the origin.



16. Rotate 90° clockwise about the origin.

