



Name _____

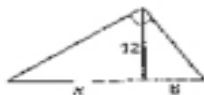
Date _____

Practice B

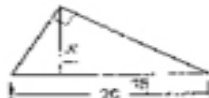
For use with pages 527-534

Complete and solve the proportion.

1. $\frac{y}{12} = \frac{9}{k}$



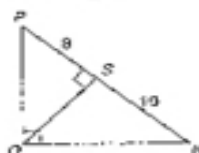
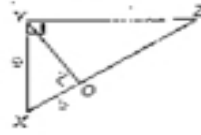
2. $\frac{15}{x} = \frac{x}{20}$



3. $\frac{9}{4} = \frac{2}{3}$



Write similarity statements for three similar triangles in the diagram. Then find the given length.

4. Find QN .5. Find YU .6. Find XZ .

Find the value of each variable.

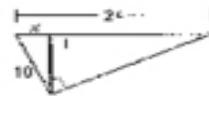
7.



8.



9.



Complete the proof.

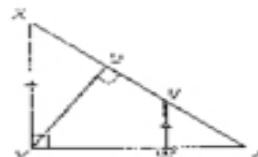
10. Given: $\triangle XYZ$ is a right triangle with $m\angle XYZ = 90^\circ$; $\overline{WV} \parallel \overline{XY}$, \overline{YW} is an altitude of $\triangle XYZ$.Prove: $\triangle YWZ \sim \triangle VWZ$

Statements _____

1. $\triangle XYZ$ is a right \triangle with altitude \overline{YW} .
2. $\triangle XYZ \sim \triangle YWZ$
3. $\overline{WV} \parallel \overline{XY}$
4. $\angle VWZ \cong \angle XYZ$
5. $\angle Z \cong \angle Z$
6. $\triangle XYZ \sim \triangle VWZ$
7. $\triangle YWZ \sim \triangle VWZ$

Reasons _____

1. _____
2. _____
3. _____
4. _____
5. _____
6. _____
7. _____



Copyright © Macmillan/McGraw-Hill, a division of The McGraw-Hill Companies, Inc. All rights reserved.

Geometry
Chapter 9 Resource Book