

Name: \_\_\_\_\_


CCSS Use addition to find the total number of objects arranged in rectangular arrays with up to 5 rows and up to 5 columns...

## Repeated Addition Arrays


**Directions:** Write an equation to solve the problems.


Use repeated addition to write an equation to show how many pumpkins are shown by the array. Circle columns of pumpkins.

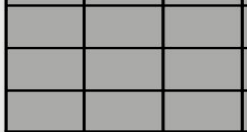
Example:



$$3 + 3 + 3 = 9$$

1.  \_\_\_\_\_

2.  \_\_\_\_\_

 \_\_\_\_\_

\_\_\_\_ I double checked my work.