

Write each missing number.

1




3



5

6

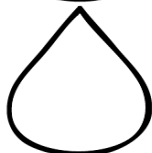


8



10

11

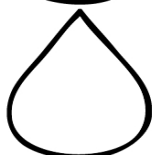


13



15

16

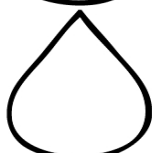


18



20

21

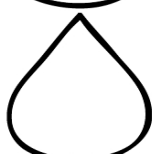


23




25

26



28



30