



Name _____


Date _____


TABLE PERIODIC ELEMENT PROPERTIES

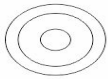
Complete each properties of the periodic table element below with the correct terms.


P = _____	<input type="radio"/> S	B
N = _____	<input type="radio"/> L	
E = _____	<input type="radio"/> G	
M.P = _____		
B.P = _____		
Properties		
Uses		
B 		


P = _____	<input type="radio"/> S	P
N = _____	<input type="radio"/> L	
E = _____	<input type="radio"/> G	
M.P = _____		
B.P = _____		
Properties		
Uses		
P 		


P = _____	<input type="radio"/> S	F
N = _____	<input type="radio"/> L	
E = _____	<input type="radio"/> G	
M.P = _____		
B.P = _____		
Properties		
Uses		
F 		

P = _____	<input type="radio"/> S	H
N = _____	<input type="radio"/> L	
E = _____	<input type="radio"/> G	
M.P = _____		
B.P = _____		
Properties		
Uses		
H 		

P = _____	<input type="radio"/> S	Ar
N = _____	<input type="radio"/> L	
E = _____	<input type="radio"/> G	
M.P = _____		
B.P = _____		
Properties		
Uses		
Ar 		

P = _____	<input type="radio"/> S	C
N = _____	<input type="radio"/> L	
E = _____	<input type="radio"/> G	
M.P = _____		
B.P = _____		
Properties		
Uses		
C 		

P = _____	<input type="radio"/> S	O
N = _____	<input type="radio"/> L	
E = _____	<input type="radio"/> G	
M.P = _____		
B.P = _____		
Properties		
Uses		
O 		

P = _____	<input type="radio"/> S	Mg
N = _____	<input type="radio"/> L	
E = _____	<input type="radio"/> G	
M.P = _____		
B.P = _____		
Properties		
Uses		
Mg 		

P = _____	<input type="radio"/> S	He
N = _____	<input type="radio"/> L	
E = _____	<input type="radio"/> G	
M.P = _____		
B.P = _____		
Properties		
Uses		
He 